

91164



NEW ZEALAND QUALIFICATIONS AUTHORITY  
MANA TOHU MĀTAURANGA O AOTEAROA

QUALIFY FOR THE FUTURE WORLD  
KIA NOHO TAKATŪ KI TŌ ĀMUA AO!

2

SUPERVISOR'S USE ONLY

## Level 2 Chemistry, 2017

### 91164 Demonstrate understanding of bonding, structure, properties and energy changes

2.00 p.m. Thursday 16 November 2017  
Credits: Five

| Achievement   | Achievement with Merit   | Achievement with Excellence   |
|---|--|---|
| Demonstrate understanding of bonding, structure, properties and energy changes. | Demonstrate in-depth understanding of bonding, structure, properties and energy changes. | Demonstrate comprehensive understanding of bonding, structure, properties and energy changes. |

Check that the National Student Number (NSN) on your admission slip is the same as the number at the top of this page.

**You should attempt ALL the questions in this booklet.**

A periodic table is provided on the Resource Sheet L2-CHEMR.

If you need more room for any answer, use the extra space provided at the back of this booklet and clearly number the question.

Check that this booklet has pages 2–12 in the correct order and that none of these pages is blank.

**YOU MUST HAND THIS BOOKLET TO THE SUPERVISOR AT THE END OF THE EXAMINATION.**

TOTAL

ASSESSOR'S USE ONLY

**QUESTION ONE**

- (a) When solid calcium chloride,  $\text{CaCl}_2(s)$ , reacts with water, the temperature increases.

Circle the term that best describes this reaction.

**endothermic**

**exothermic**

Give a reason for your choice.

---

---

- (b) When a person sweats, water is lost from the body by evaporation. This is an endothermic process. This evaporation speeds up when a person exercises.

- (i) Explain why the evaporation of water in sweat from the body is endothermic, and why exercise increases this evaporation.

---


---

---

---

---

- (ii) Draw a labelled enthalpy diagram for the evaporation of water,  $\text{H}_2\text{O}(\ell)$ .



(iii) Sodium chloride, NaCl, is another compound that is excreted from the body in sweat.

Use your knowledge of structure and bonding to explain the dissolving process of sodium chloride, NaCl, in water.

Support your answer with a labelled diagram.

---

---

---

---

---

---

---

---

---

---

---

---

---

---

---

---

---

---

---

---

---


---

---

---

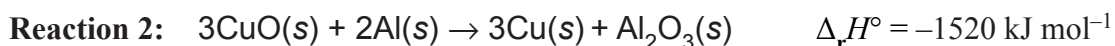
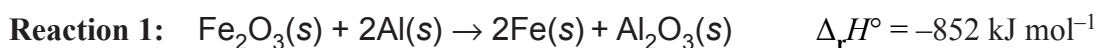
---

Space for diagram



(c) Thermite reactions occur when a metal oxide reacts with a metal powder.

The equations for two thermite reactions are given below:



Use calculations to determine which metal oxide, iron(III) oxide,  $\text{Fe}_2\text{O}_3(\text{s})$ , or copper(II) oxide,  $\text{CuO}(\text{s})$ , will produce more heat energy when 50.0 g of each metal oxide is reacted with aluminium powder,  $\text{Al}(\text{s})$ .

$$M(\text{Fe}_2\text{O}_3) = 160 \text{ g mol}^{-1}$$

$$M(\text{CuO}) = 79.6 \text{ g mol}^{-1}$$

---

---

---

---

---

---

---

---

---

---

---

---

---

---

---

---

---

---


---

---

---

---

---



## QUESTION TWO

- (a) (i) Draw the Lewis structure (electron dot diagram) for the following molecules, and name their shapes.

| <b>Molecule</b>                                       | HOCl   | COCl <sub>2</sub> | NF <sub>3</sub> |
|---|--------|-------------------|-----------------|
| <b>Lewis structure</b>                                |        |                   |                 |
| <b>Name of shape</b>                                  |        |                   |                 |
| <b>Approximate bond angle around the central atom</b> | 109.5° | 120°              | 109.5°          |

- (ii) Justify the shapes and bond angles of HOCl and COCl<sub>2</sub>.

---

---

---

---

---

---

---

---

---

---

---

---

---

---

---

---

---

---

---

---

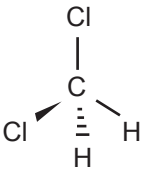
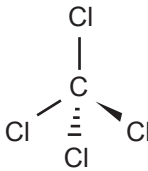
---

---

---

---

(b) Three-dimensional diagrams for two molecules are shown below.

|                             |   |   |
|-----------------------------|---|---|
| <b>Molecule</b>             |  |  |
| <b>Name</b>                 | Dichloromethane   | Tetrachloromethane  |
| <b>Polarity of molecule</b> |   |   |

- (i) In the boxes above, identify the polarity of each molecule, by writing either **polar** or **non-polar**.
- (ii) Justify your choices.

---

---

---

---

---

---

---

---

---

---

---

---

---

---

---

---

---

---

---

---

---

---

---

---

---

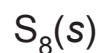


**QUESTION THREE**

- (a) Complete the table below by stating the type of solid, the type of particle, and the type of bonding (attractive forces) between the particles in each solid.

| <b>Solid</b>                                       | <b>Type of solid</b> | <b>Type of particle</b> | <b>Attractive forces between particles</b> |
|--|----------------------|-------------------------|--|
| <b>Al(s)</b><br>(aluminium)                        |                      |                         |  |
| <b>MgCl<sub>2</sub>(s)</b><br>(magnesium chloride) |                      |                         |  |
| <b>S<sub>8</sub>(s)</b><br>(sulfur)                |                      |                         |  |

- (b) Circle the substance which has the lowest melting point.



Justify your choice, referring to the attractive forces between the particles of ALL three substances.

---

---

---

---

---

---

---

---

---

---

---

---

---

---

---

---

---

---

---

---

---

---

---

---



---

---

---

---

---

---

---

---

---

---

---

---

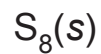
---

---

---

**Question Three  
continues on the  
following page.**

(c) Circle the substance which is malleable.



Justify your choice by referring to the structure and bonding of your chosen substance.

You may include a diagram or diagrams in your answer.

---

---

---

---

---

---

---

---

---

---

---

---

---

---

---

---

---

---

---

---

---


---

---

---

---

Space for diagram





**Extra paper if required.  
Write the question number(s) if applicable.**

ASSESSOR'S  
USE ONLY

QUESTION  
NUMBER

91164