

No part of the candidate evidence in this exemplar material may be presented in an external assessment for the purpose of gaining credits towards an NCEA qualification.

# 3

91391



913910



NEW ZEALAND QUALIFICATIONS AUTHORITY  
MANA TOHU MĀTAURANGA O AOTEAROA

QUALIFY FOR THE FUTURE WORLD  
KIA NOHO TAKATŪ KI TŌ ĀMUA AO!

SUPERVISOR'S USE ONLY

## Level 3 Chemistry, 2017

### 91391 Demonstrate understanding of the properties of organic compounds

2.00 p.m. Wednesday 15 November 2017  
Credits: Five

Achievement	Achievement with Merit	Achievement with Excellence
Demonstrate understanding of the properties of organic compounds.	Demonstrate in-depth understanding of the properties of organic compounds.	Demonstrate comprehensive understanding of the properties of organic compounds.

Check that the National Student Number (NSN) on your admission slip is the same as the number at the top of this page.

**You should attempt ALL the questions in this booklet.**

A periodic table is provided on the Resource Sheet L3-CHEMR.

If you need more room for any answer, use the extra space provided at the back of this booklet and clearly number the question.

Check that this booklet has pages 2–12 in the correct order and that none of these pages is blank.

**YOU MUST HAND THIS BOOKLET TO THE SUPERVISOR AT THE END OF THE EXAMINATION.**

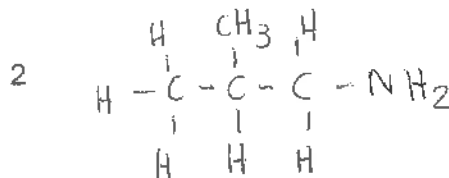
**Merit**

**TOTAL**

**15**

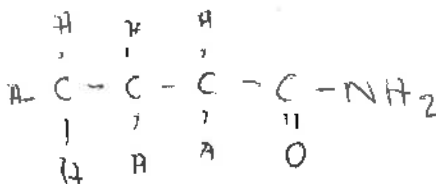
ASSESSOR'S USE ONLY

## QUESTION ONE



- (a) Complete the table below to indicate the IUPAC name, functional group, and/or the structural formula for organic compounds that contain only four carbon atoms. The first row has been completed for you.

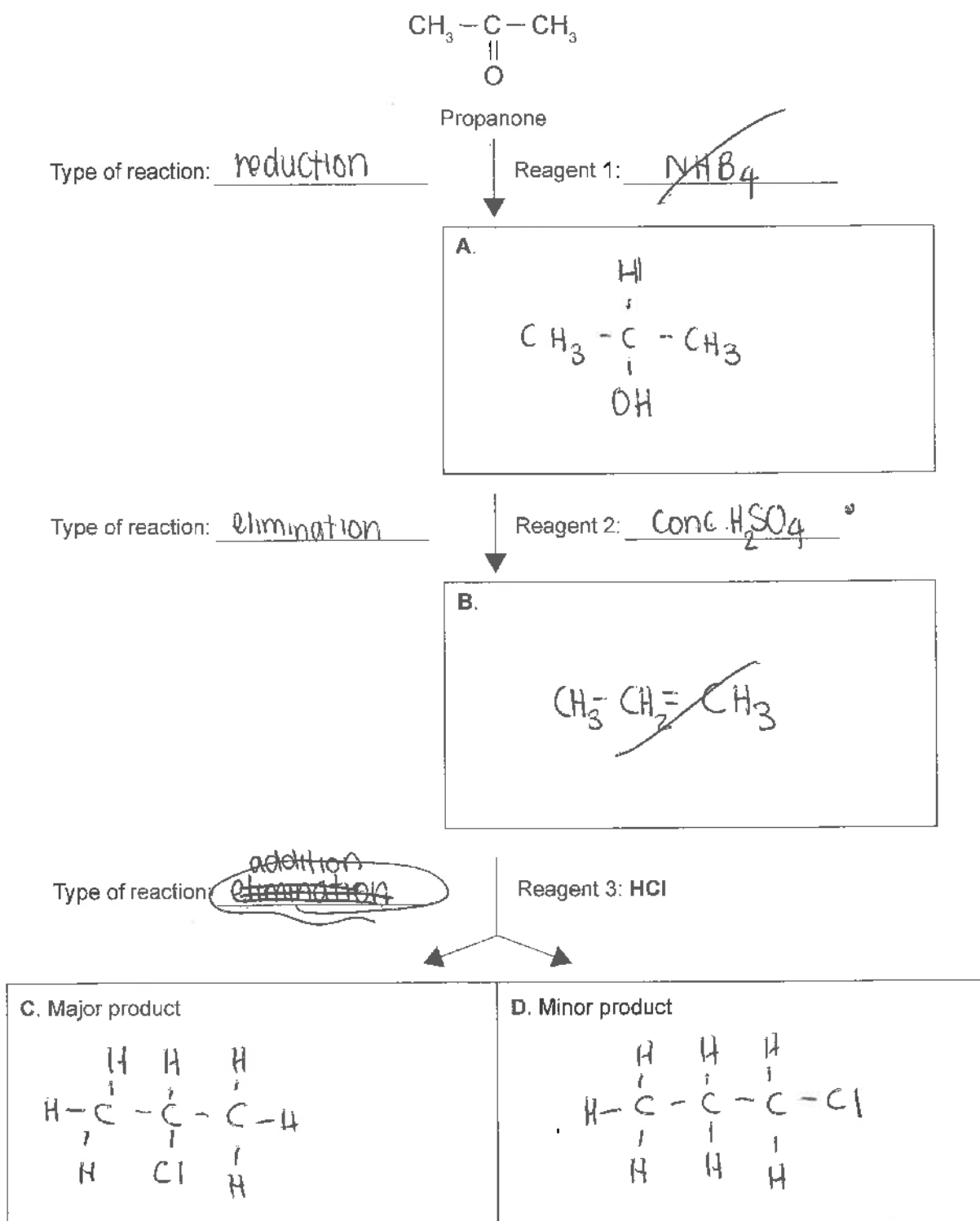
Functional group	Structural formula	IUPAC (systematic) name
Alkene	$\text{CH}_3\text{CH}_2\text{CH}=\text{CH}_2$	but-1-ene
Amine	$  \begin{array}{c}  \text{CH}_3 \\    \\  \text{CH}_3 - \text{CH} - \text{CH}_2 - \text{NH}_2  \end{array}  $	2-methylpropan-1-amine
Acyl chloride	$  \text{CH}_3 - \text{CH}_2 - \text{CH}_2 - \text{CH}_2 - \text{Cl}  $	<del>propanoylchloride</del>
ester	$  \begin{array}{c}  \text{CH} - \text{O} - \text{CH}_2 - \text{CH}_2 - \text{CH}_3 \\     \\  \text{O}  \end{array}  $	propyl methanoate
ketone	$  \text{CH}_3\text{CH}_2 - \text{C} - \text{CH}_3 \\     \\  \text{O}  $	<del>propan-1-one</del> propanone
Aldehyde	$  \text{CH}_3 - \text{CH}_2 - \text{CH}_2 - \text{CH} \\     \\  \text{O}  $	<del>propanal</del> butanal
Amide	$  \text{CH}_3 - \text{CH}_2 - \text{CH}_2 - \text{C} - \text{NH}_2 \\     \\  \text{O}  $	butanamide



- (b) Complete the following reaction scheme by drawing the structural formulae of both organic compounds **A** and **B**, as well as the major and minor products **C** and **D**.

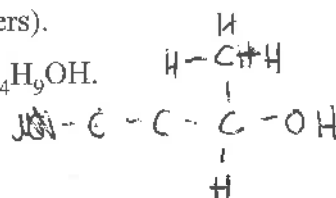
ASSESSOR'S  
USE ONLY

Identify both reagents 1 and 2, and indicate the type of reaction occurring at each step.

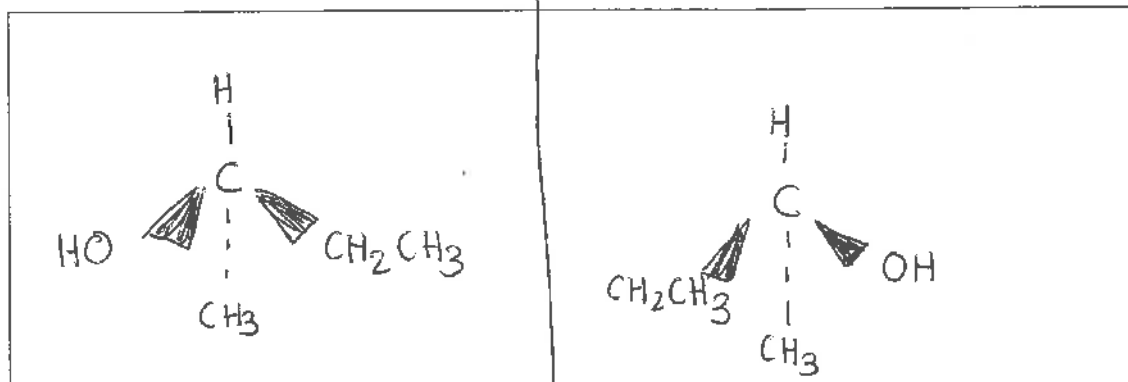


(c) Some organic compounds can exist as enantiomers (optical isomers).

An example is a secondary alcohol with the molecular formula  $C_4H_9OH$ .



(i) Draw the enantiomers of  $C_4H_9OH$  in the box below.



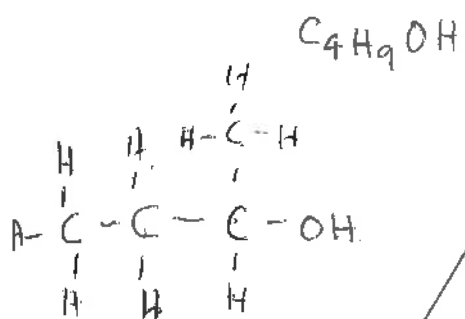
(ii) Explain what is meant by the term enantiomers (optical isomers).

In your answer, you should:

- identify the structural requirement for a molecule, such as  $C_4H_9OH$ , to exist as enantiomers
- explain how enantiomers can be distinguished from each other.

For  $C_4H_9OH$  to exist as an enantiomer, it needs a chiral carbon. A chiral carbon is a carbon that is attached to four different groups. In this case,  $C_4H_9OH$  can form OH, H,  $CH_2CH_3$  &  $CH_3$  attached to a carbon (C). Enantiomers ~~rotate~~<sup>rotate</sup> planes of polarised light ~~that~~ in different/opposite directions that ~~disting~~ can be used to distinguish from each other.

This page has been deliberately left blank.  
The examination continues on the following page.



## QUESTION TWO

- (a) Compound **P** and compound **Q** are straight-chain constitutional (structural) isomers with the molecular formula  $C_5H_{12}O$ . Compound **P** can form optical isomers, whereas compound **Q** cannot.

When reacted with concentrated sulfuric acid, compound **P** forms two products, compounds **R** and **S**; compound **Q** forms only one product, compound **S**.

When compound **Q** is reacted with *Reagent 1*, it forms a chloroalkane, compound **T**.

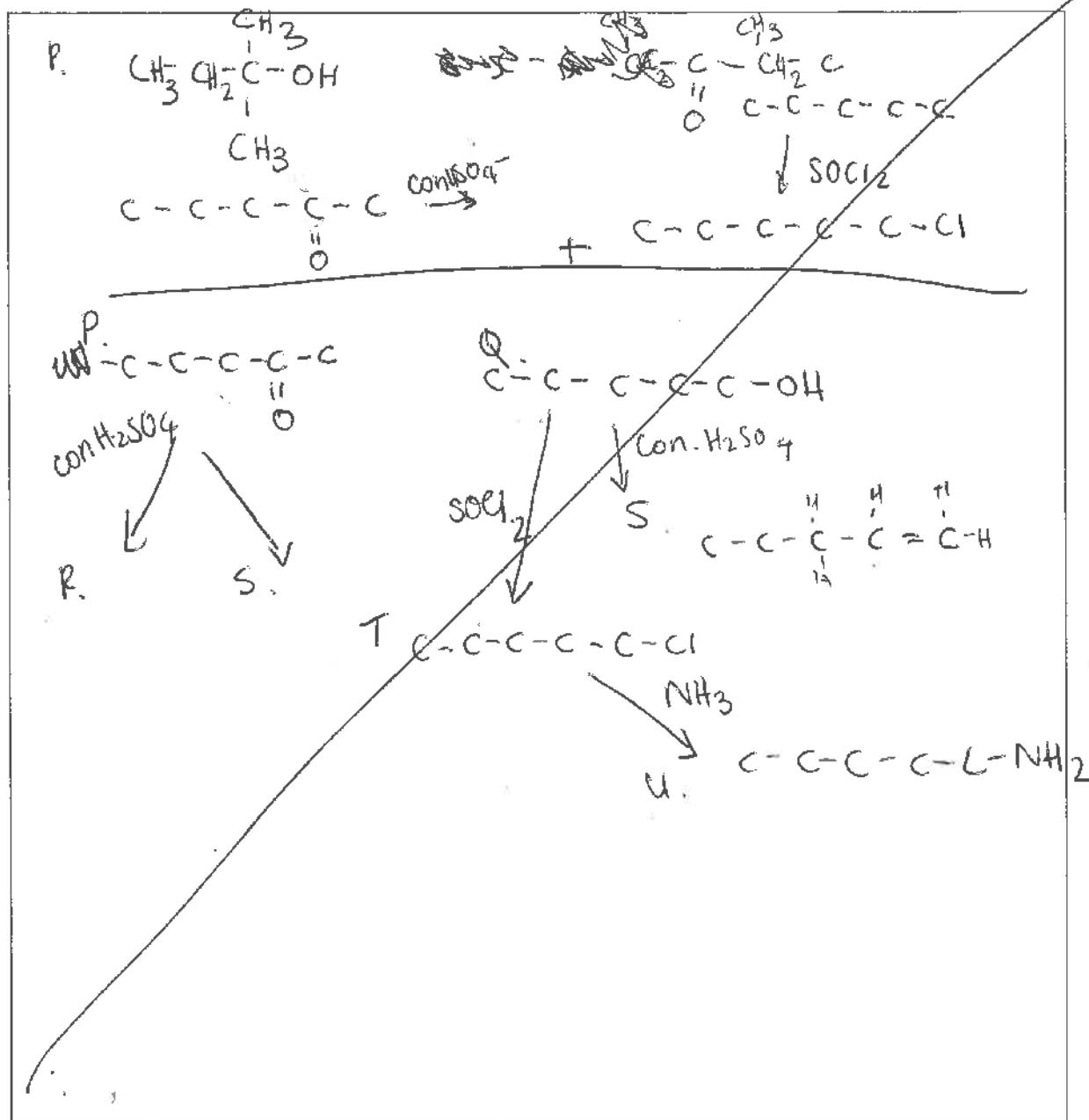
Compound **T** reacts with concentrated  $NH_3$  to form compound **U**.

Compound **Q** can also be oxidised to form compound **V**, which will turn moist blue litmus paper red.

Compound **V** can also be reacted with compound **Q** and *Reagent 2*, to form a sweet-smelling liquid, compound **W**.

Use the information above to identify compounds **P** to **W**, and *reagents 1* and *2*.

Space for planning/working is provided in the box below.



Complete the following tables using the information found on the previous page.

ASSESSOR'S  
USE ONLY

Compound	Structure
P	$\text{CH}_3 - \text{CH}_2 - \text{CH}_2 - \underset{\text{O}}{\underset{\parallel}{\text{C}}} - \text{CH}_3$ ketone
Q	$\text{CH}_3 - \text{CH}_2 - \text{CH}_2 - \text{CH}_2 - \underset{\text{OH}}{\text{CH}}$ alcohol <del>aldehyde</del>
R	$\text{CH}_3 - \text{CH}_2 - \text{CH}_2 - \text{CH}_2 - \text{CH}_3$ alkane <del>alk</del>
S	$\text{CH}_3 - \text{CH}_2 - \text{CH}_2 - \underset{\text{H}}{\text{C}} = \underset{\text{H}}{\text{C}} - \text{CH}_3$ alkene
T	$\text{CH}_3 - \text{CH}_2 - \text{CH}_2 - \text{CH}_2 - \text{CH}_2 - \text{Cl}$ chloroalkane <del>hal</del>
U	$\text{CH}_3 - \text{CH}_2 - \text{CH}_2 - \text{CH}_2 - \text{CH}_2 - \text{NH}_2$ amide
V	$\text{CH}_3 - \text{CH}_2 - \text{CH}_2 - \underset{\text{O}}{\underset{\parallel}{\text{C}}} - \text{OH}$ Carboxylic acid
W	$\text{CH}_3 - \text{CH}_2 - \text{CH}_2 - \text{CH}_2 - \underset{\text{O}}{\underset{\parallel}{\text{C}}} - \text{O} - \text{CH}_2 - \text{CH}_2 - \text{CH}_2 - \text{CH}_2 - \text{CH}_3$ ester

Reagent 1	$\text{SOCl}_2$
Reagent 2	conc. $\text{H}_2\text{SO}_4$

green  $\rightarrow$  orange 8

- (b) (i) Adding an acidified potassium dichromate solution to propan-1-ol can produce either propanal or propanoic acid.  
distillation reflux.

Explain the laboratory procedure used to convert propan-1-ol to **propanal**.

In your answer, you should:

- primary aldehyde.
- outline the procedure for the conversion, and describe any colour changes linked to the species involved
  - state the type of reaction occurring
  - explain how the procedure ensures only **propanal** is collected.

Propan-1-ol can be oxidised to form either propanal or propanoic acid using  $\text{Cr}_2\text{O}_7^{2-}/\text{H}^+$ . To ensure that propanal is only collected, we use the procedure called distillation.  $\text{Cr}_2\text{O}_7^{2-}/\text{H}^+$  and reflux will produce propanoic acid. The colour of the solution will change from green to orange when propan-1-ol is oxidised. When propanal is formed  $\text{Cr}_2\text{O}_7^{2-}/\text{H}^+$  will turn into  $\text{Cr}^{3+}$  ions.

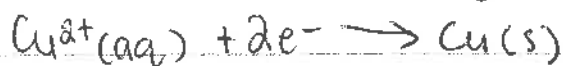
- (ii) Explain how Benedict's solution can be used to distinguish between propanone and propanal. <sup>ketone</sup> aldehyde.

In your answer, you should include:



- any observations made linked to the organic compounds involved
- the type of reaction occurring
- relevant equations showing any organic reactants and products involved.

Benedict's solution is an oxidant. When benedict's solution is added to propanone and propanal, only propanal will react to the solution because ketones can't be oxidised. The type of reaction occurring is ~~oxidation~~ <sup>redox reaction</sup>. Propanal gets oxidised to propanoic acid. The colour of this solution changes from blue to a reddy brown precipitate.

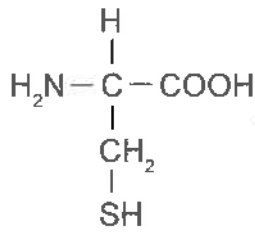




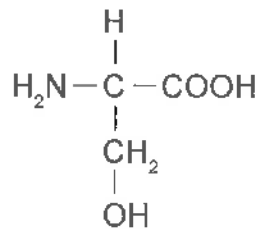
## QUESTION THREE

Peptides are molecules that form when amino acids combine.

The following structures show the amino acids cysteine and serine.

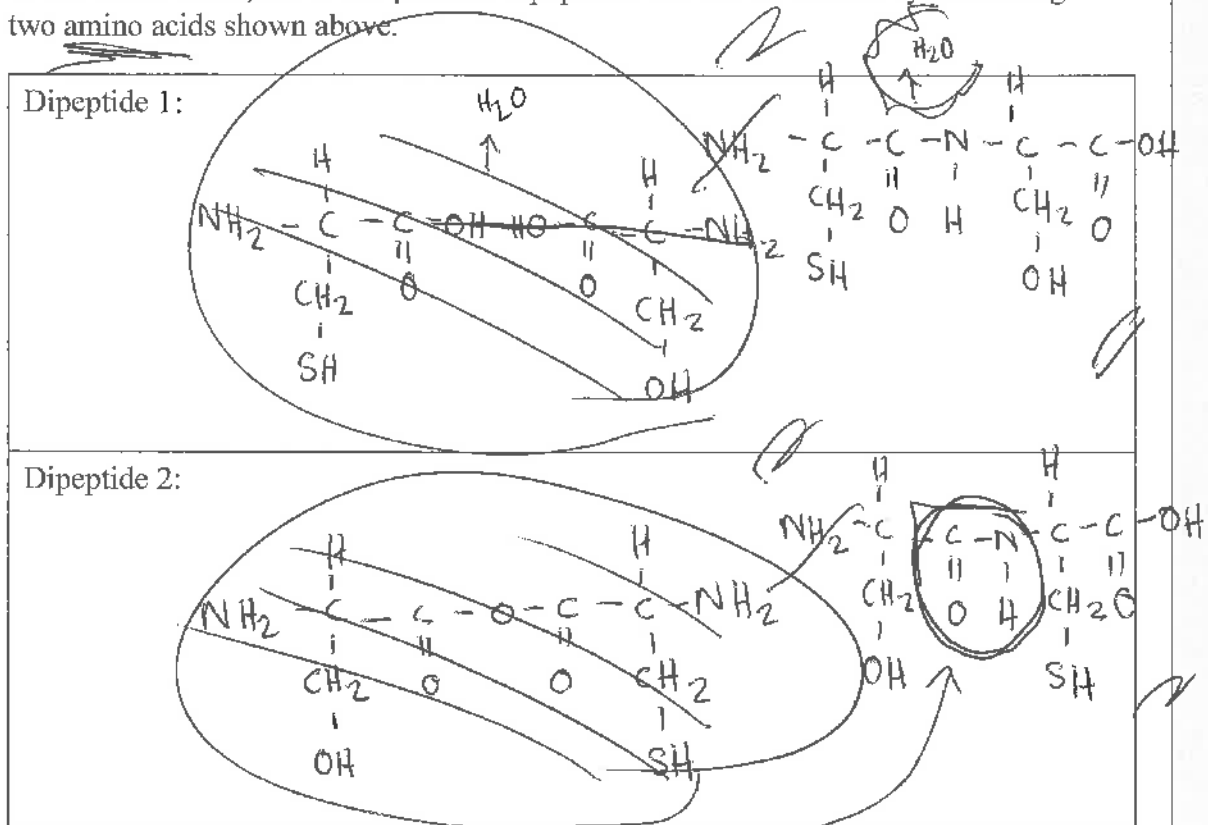


cysteine

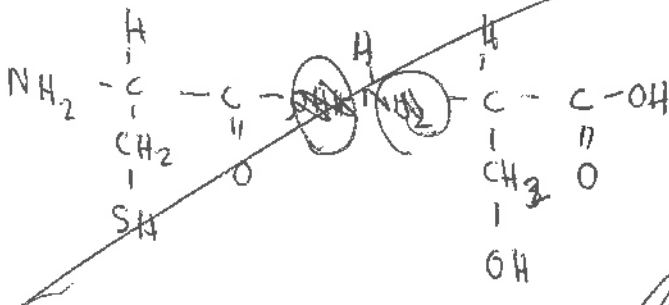


serine

- (a) (i) In the boxes below, show two possible dipeptides that can be formed by combining the two amino acids shown above.

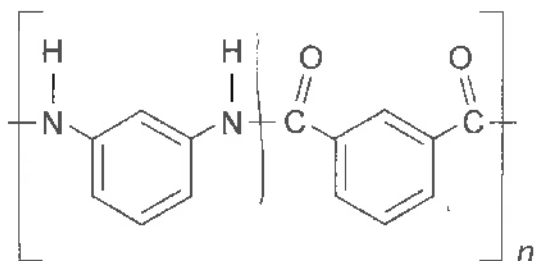


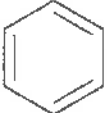
- (ii) Circle the amide functional group on ONE of the dipeptides drawn in part (i).



- (b) Nomex® is a polymer used in firefighters' suits. Nomex® is made up of two different monomers bonded together to form the polymer chain.

A small portion of the structure of Nomex® is shown below.

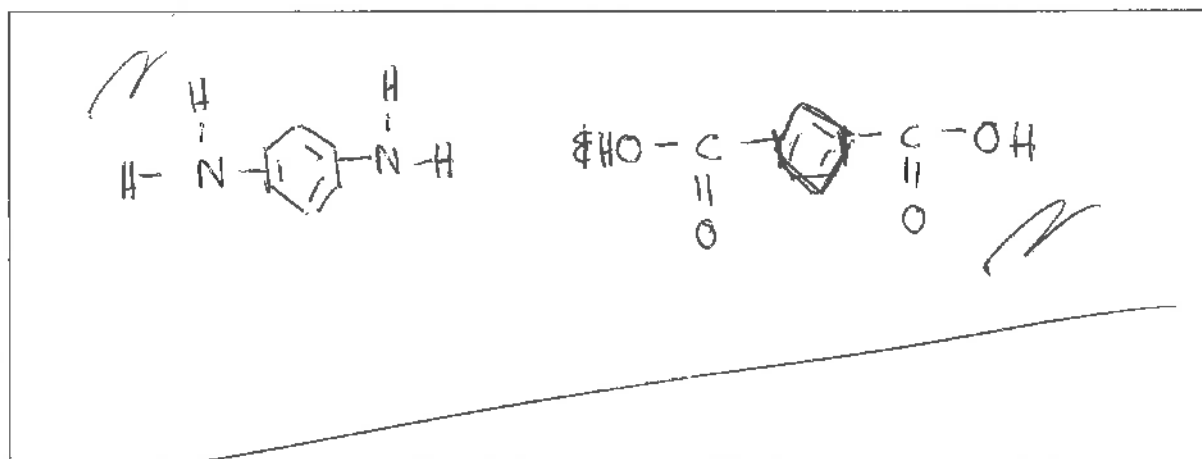


Note:  is a benzene ring and does not change when the monomers bond together to form the polymer.

Explain the structure of the polymer, Nomex®.

In your answer, you should include:

- the name of the functional group linking the monomers
- a drawing of both monomers
- a classification of the type of polymer formed, with an explanation to justify your choice.



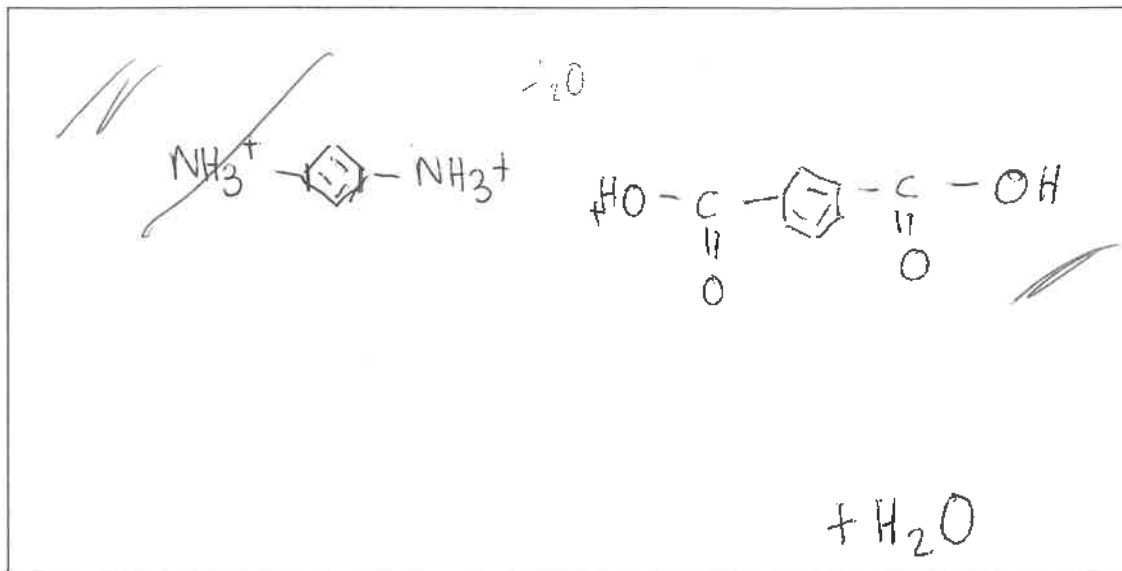
The name of the functional groups linking the monomers is called the amide link. The Nomex polymer is formed by the two monomers above with  $H_2O$ .  $H_2O$  attaches the monomers together ~~when they are~~ This is because when they are broken apart through the amide link,  $H_2O$  is condensed out. An OH is attached to the carbonyl group and an H is attached to the amino group.

(c) Polymers such as Nomex® can be hydrolysed by either aqueous acid or base.

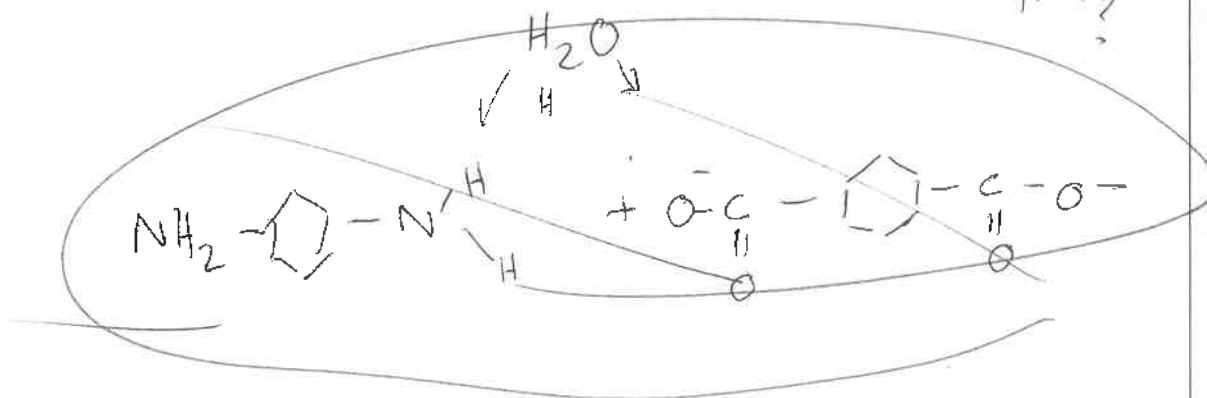
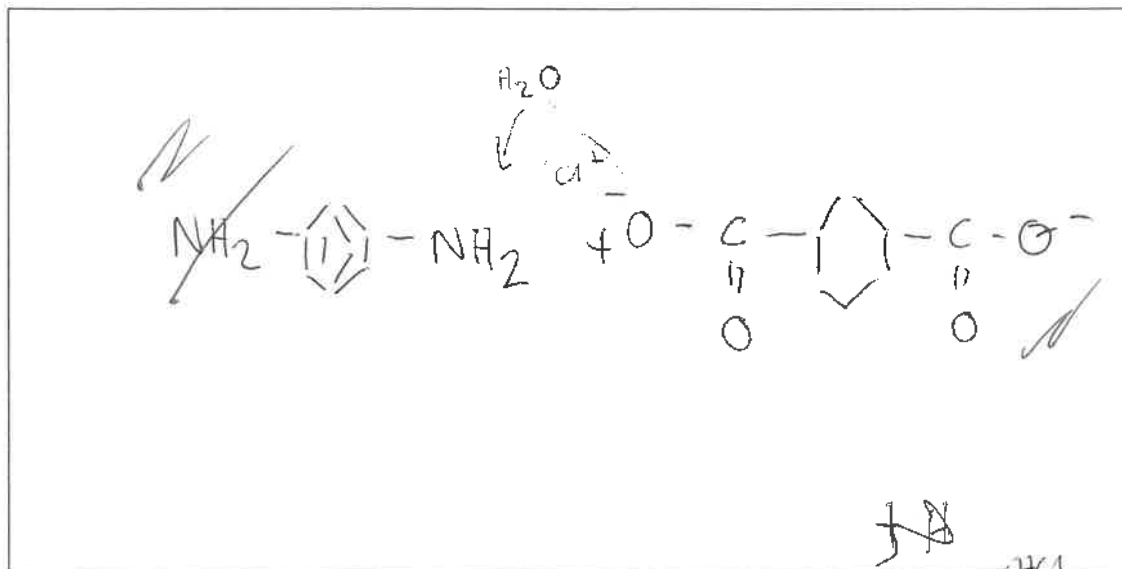
ASSESSOR'S  
USE ONLY

Show the products of the hydrolysis of Nomex® using:

(i) aqueous acid



(ii) aqueous base.



M5

Subject:		Chemistry	Standard:		91391	Total score:		15
Q	Grade score	Annotation						
1	M5	The candidate can draw most structures correctly, can follow a reaction scheme and understands optical isomers. Had the candidate eliminated errors with the drawing of structures in Q1(a), (b) or (c) they would have gained an M6 or higher.						
2	M5	Again, errors drawing structures in Q2(a) have prevented a higher grade. Also, the answer to part (b)(i) lacks clarity. The colour change is reversed and there needs to be greater reference to the requirement to separate propanal the moment it is formed to prevent further oxidation to propanoic acid.						
3	M5	Again, errors drawing structures have prevented a higher grade. When drawing functional groups such as NH <sub>2</sub> or OH of the left-hand side of a molecule they need to be drawn as they would connect, e.g. H <sub>2</sub> N and HO. Also, the description of condensation polymerisation in part (b) is not clear enough for a higher grade.						